

تم تحميل هذا الملف من موقع المناهج الإماراتية



almanahj.com

موقع
المناهج الإماراتية

*للحصول على أوراق عمل لجميع الصفوف وجميع المواد اضغط هنا

<https://almanahj.com/ae>

* للحصول على أوراق عمل لجميع مواد الصف الثاني اضغط هنا <https://almanahj.com/ae/2>

* للحصول على جميع أوراق الصف الثاني في مادة علوم ولجميع الفصول, اضغط هنا [2science/ae/com.almanahj//:https](https://almanahj.com/ae/2science)

























* للحصول على أوراق عمل لجميع مواد الصف الثاني في مادة علوم الخاصة بـ الفصل الثاني اضغط هنا

<https://almanahj.com/ae/2science2>

* لتحميل كتب جميع المواد في جميع الفصول للـ الصف الثاني اضغط هنا [grade2/ae/com.almanahj//:https](https://almanahj.com/ae/grade2)

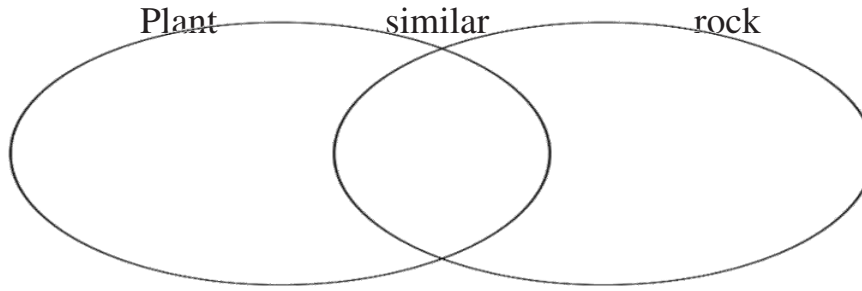
للتحدث إلى بوت المناهج على تلغرام: اضغط هنا [bot_almanahj/me.t//:https](https://t.me/bot_almanahj)

Question 1: choose the correct answer :

<p>1-what living thing do you see in picture</p> <p>A. Students B. Board C. tables</p> 	<p>2-example of human made thing</p> <p>A.  B.  C. </p>
<p>3-Example of nonliving thing :</p> <p> frog  chair  zebra</p>	<p>4-long ago , people use this ax head from rock to</p> <p>A. kill animal B. building C. ground some thing</p> 
<p>5-which of the this would not from rocks and minerals?</p> <p>Jewelry buildings electrical device</p>   	<p>6-Which of this minerals are not from granite rock</p> <p>A. graphite B. Quartz. C. Magnetite</p> 
<p>7--Mineral are not</p> <p>A. Living thing B. Nonliving C. Hard</p> 	<p>8--turquoise mineral is use to made</p> <p>A.  B.  C. </p>
<p>9--Fluorite mineral is use to made</p> <p>A.  B.  C. </p>	<p>10-What is type this soil ?</p> <p>A. Clay B. Sandy C. organic</p> 
<p>11- What are make the soil healthy?</p> <p>A. Nutrients B. Sun C. Rocks</p>	<p>12- this living thing are called</p> <p>A. nutrients B. decomposer C. mammals</p>  <p style="text-align: center;">Worm Mushroom Insects Bacteria</p>
<p>13-this picture for</p> <p>A. soil B. rotting log C. worm</p> 	<p>14-What is SOIL made of?</p> <p>A. Living thing only B. Broken rocks only C. Broken rocks and living things are decomposed</p>
<p>15-What is the layer of soil just under the grass?</p> <p>A. Bedrock B. Subsoil C. topsoil</p>	<p>16-Which of this is NOT of soil?</p> <p>A. Clay B. Rock C. Organic</p>
<p>17-The picture below that will never become soil</p> 	<p>18- Most rocks are</p> <p>A. different shapes and sizes. B. Same feel or color C. same size</p> 

Q2: How are plant and rock different and alike?

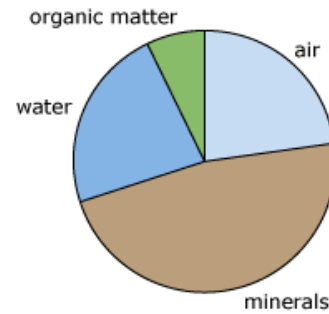
Living thing nonliving things natural thing growing not move



Q3 : Look for the chart then answer :

1-What is the lowest materials in soil ?.....

2-What is the highest materials in soil ?



Q4:Write the correct word in the blank :

Mushrooms - soil - decompose - silt - subsoil

1-(.....) is a mix of tiny rocks and bits of dead plants and animals.

2-(.....) break down the dead plants and animals .

3-(.....) A layer of soil below topsoil

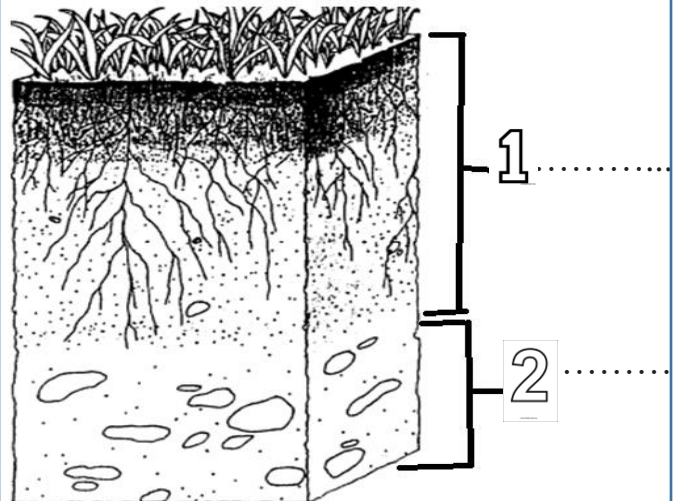
4-(.....) Layer of soil , it best for growing .

5-(.....) tiny pieces of broken rock in soil

Q5:Put true (T) or false (F) :






























- 1-() Minerals in rocks can not make them shine
- 2-() graphite is the mineral used to make a pencil.
- 3-() A rock hammer is used to break rocks.
- 4-() Rocks have been used as tools for few of years.
- 5-() some rocks can be carved.
- 6-() soil is not natural resource
- 7-() clay soil feel very rough between your fingers

Q6: Write name of soil's layers :



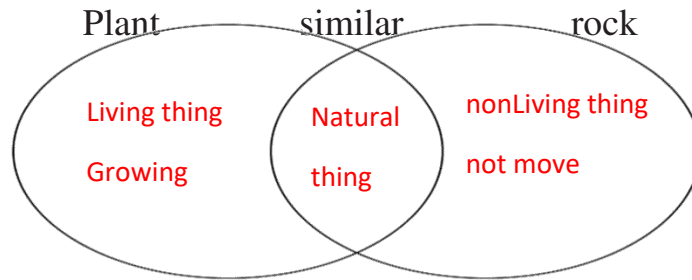
أرجو تدريب الطلاب على قراءة الأسئلة بأنفسهم وفهمها حتى يسهل على الطالب حل السؤال حتى لو تغير السؤال يكون قادر على تقديم الإجابة الصحيحة

Question 1: choose the correct answer :

<p>1-what living thing do you see in picture</p> <p>A. Students</p> <p>B. Board</p> <p>C. tables</p> 	<p>2-example of human made thing</p> <p>B. </p> <p>B. </p> <p>C. </p>
<p>3-Example of nonliving thing :</p> <p> frog</p> <p> chair</p> <p> zebra</p>	<p>4-long ago , people use this ax head from rock to</p> <p>A. kill animal</p> <p>B. Building</p> <p>C. ground some things</p> 
<p>5-which of the this would not from rocks and minerals?</p> <p>Jewelry </p> <p>buildings </p> <p>electrical device </p>	<p>6-Which of this minerals are from granite rock</p> <p>A. Graphite</p> <p>B. Quartz.</p> <p>C. Magnetite</p> 
<p>7--Mineral are not</p> <p>A. Living thing</p> <p>B. Nonliving</p> <p>C. Hard</p> 	<p>8-turquoise mineral is use to made</p> <p>A. </p> <p>B. </p> <p>C. </p>
<p>9--Fluorite mineral is use to made</p> <p>A. </p> <p>B. </p> <p>C. </p>	<p>10-What is type this soil ?</p> <p>A. Clay</p> <p>B. Sandy</p> <p>C. organic</p> 
<p>11- What are make the soil healthy?</p> <p>A. Nutrients</p> <p>B. Sun</p> <p>C. Rocks</p>	<p>12- this living thing are called</p> <p>A. nutrients</p> <p>B. decomposer</p> <p>C. mammals</p> <p> Worm  Mushroom  Insects  Bacteria</p>
<p>13-this picture for</p> <p>A. soil</p> <p>B. rotting log</p> <p>C. worm</p> 	<p>14-What is SOIL made of?</p> <p>A. Living thing only</p> <p>B. Broken rocks only</p> <p>C. Broken rocks and living things are decomposed</p>
<p>15-What is the layer of soil just under the grass?</p> <p>A. Bedrock</p> <p>B. Subsoil</p> <p>C. Topsoil</p>	<p>16-Which of this is NOT of types soil?</p> <p>A. Clay</p> <p>B. Rock</p> <p>C. Organic</p>
<p>17-The picture below that will never become soil</p> <p></p> <p></p> <p></p>	<p>18- Most rocks are</p> <p>A. different shapes and sizes.</p> <p>B. Same feel or color</p> <p>C. same size</p> 

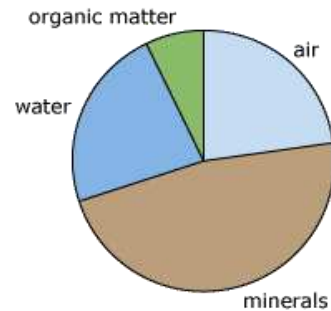
Q2: How are plant and rock different ? how are they alike ?

Living thing	nonliving things	natural thing	growing	not move
--------------	------------------	---------------	---------	----------



Q3: Look for the chart then answer :

- 1-What is the lowest materials in soil ? organic matter
- 2-What is the highest materials in soil ? minerals



Q4: Write the correct word in the blank :

Mushrooms - soil - decompose - silt - subsoil

- 1-(**soil**) is a mix of tiny rocks and bits of dead plants and animals.
- 2-(**decompose**) break down the dead plants and animals .
- 3-(**subsoil**) A layer of soil below topsoil
- 4-(**topsoil**) Layer of soil , it best for growing .
- 5-(**silt**) tiny pieces of broken rock in soil

Q5: Put true (T) or false (F) :

- 1-(**F**) Minerals in rocks can not make them shine.
- 2-(**T**) graphite is the mineral used to make a pencil.
- 3-(**T**) A rock hammer is used to break rocks.
- 4-(**F**) Rocks have been used as tools for few of years.
- 5-(**T**) some rocks can be carved.
- 6-(**F**) soil is not natural resource.
- 7-(**T**) clay soil feel very smooth between your fingers.

Q6: Write name of soil's layers :

