
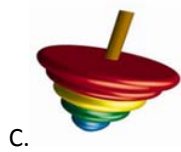



Science Exam T3: Grade 2 Mock

1. Which toy can you move by pushing it?

[3]



2. Which object from the picture would fall the fastest?

[3]



3. Which object is **NOT** a natural light?

[3]

- A. moon
- B. sun
- C. mirror
- D. lightning

alManahj.com/ae

4. Which is **NOT** a good way to conserve light energy?

[3]

- A. turn off the light when not in the room
- B. turn off the T.V when not watching it
- C. turn off the ipad when not using it
- D. turn on the T.V and go out to play


5. Which choice is **NOT** one of our five senses?

[3]

- A. hearing
- B. tasting
- C. lifting
- D. smelling

6. Which source of light do we **NOT** use during the night?

[3]



7. Light travels in straight line called?

[3]

- A). shadow
- B). rays
- C). shape
- D). pictures

8. What sense can you use to describe the picture?

[3]



alManahj.com/ae

- A. tasting
- B. smelling
- C. hearing
- D. sound

9. What sense is the boy using to read the book?


[3]



- A. smelling
- B. tasting
- C. seeing
- D. hearing

10. Which picture is a sound made in the **PAST**?

[3]



11. What is the **BEST** word to describe the picture ?

[3]



- A. soft B. flexible C. heavy D. shiny

12. Which picture is made from cotton?

[3]



13. What force is the man using to open the jar?

[3]



- A. pull B. push C. twist D. pull

14. Choose the **BEST** word to fill in the blank

[3]

Gravity is the force that pulls all objects_____.

- A. along
B. push
C. downwards
D. pull

15. What is the **BEST** way to conserve energy?

[3]



A. leave the water running while brushing your teeth



B. turn off the light when you leave the room



C. turn on the A.C and leave the room



D. play outside with friends

16. Which of these tools would you use to cut wood?

[3]

A. knife

B. hammer

C. saw

D. spade

alManahj.com/ae

17. What material is this tool made from?

[3]



A. cotton

B. metal

C. polyester

D. sink

18. What is the **BEST** material to build a desk?

[3]

A. paper

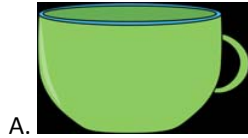
B. strong

C. wood

D. strong

19. Which material is heavy, hard and brown?

[3]



alManahj.com/ae

20. Which picture is the **BEST** example of gravity making it move?

[3]



21. Draw a line to match the objects with their description.

[16]

Wooden spoon

round and smooth

Drinks can

hard and rough

Mirror

soft and flexible

T-shirt

shiny and flat

22. Name three natural light sources

[12]

1. _____

2. _____

3. _____

23. Label the picture with the correct word

[8]

Stretch more	Strong	Stretch least
--------------	--------	---------------





24. Choose the correct word from the box to match each instrument

[12]

hit	blow	pluck	shake
-----	------	-------	-------







alManahj.com/ae

25. Write 2 sounds that helps to keep us safe

[2]

1. _____

2. _____

alManahj.com/ae