

شكراً لتحميلك هذا الملف من موقع المناهج الإماراتية



حل أوراق عمل PATTERN WEATHER

[موقع المناهج](#) ⇨ [المناهج الإماراتية](#) ⇨ [الصف الثالث](#) ⇨ [علوم](#) ⇨ [الفصل الثاني](#) ⇨ [الملف](#)

التواصل الاجتماعي بحسب الصف الثالث

روابط مواد الصف الثالث على تلغرام

[الرياضيات](#)

[اللغة الانجليزية](#)

[اللغة العربية](#)

[التربية الاسلامية](#)

المزيد من الملفات بحسب الصف الثالث والمادة علوم في الفصل الثاني

[أسئلة الامتحان النهائي - انسابير](#)

1

[أسئلة الامتحان النهائي - بريدج](#)

2

[حل أسئلة الامتحان النهائي](#)

3

[أسئلة الامتحان النهائي](#)

4

[مراجعة عامة لصور الكتاب](#)

5

Student Name: _____ Class: _____ Date: _____

Lesson: Weather Patterns

Fill in the blanks using the available answer choices:

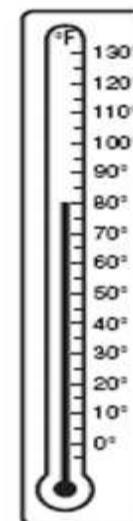
weather vane – weather – precipitation--speed

- 1) A tool that measures wind direction is a
- 2) An anemometer measures wind
- 3) Water that falls from the atmosphere is called
- 4) Precipitation, wind, and air pressure are all ways to describe the

Choose the appropriate letters A, B, C or D:

- 5) What temperature (in degrees Fahrenheit) does the thermometer show?

- A. 20°F
- B. 40°F
- C. 60°F
- D. 80°F



- 6) Which would be used to measure air pressure?

- A. weather vane
- B. thermometer
- C. anemometer
- D. barometer

- 7) Which is a type of precipitation?

- A. wind
- B. hot temperatures
- C. rain
- D. tornadoes

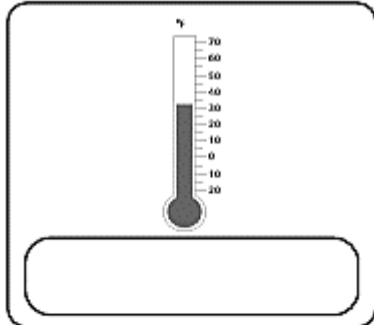
- 8) What the air is like at a certain time and place is _____.

- A. wind
- B. atmosphere
- C. weather
- D. gases

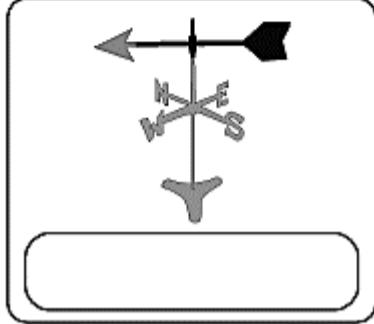
9) Match each description to the correct weather tool. Write the name of the tool

(The first one has been done for you.)

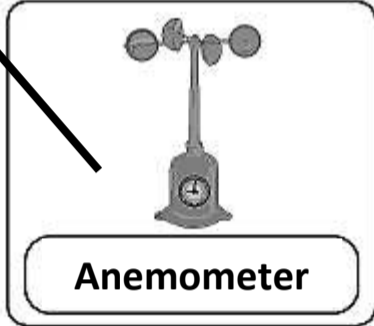
It is an instrument for recording the speed and direction of the wind.



It is an instrument used to measure the temperature.

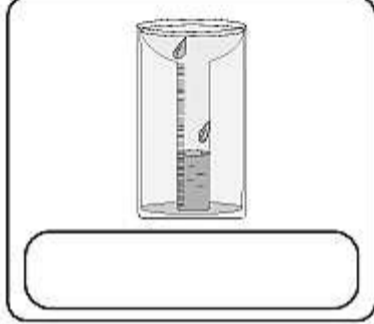


It measures atmospheric pressure.

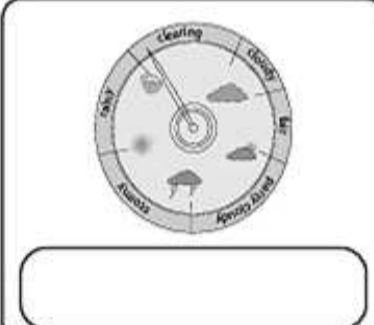


Anemometer

This tool shows the direction of the wind.



It is a device used to measure rainfall.



10) Study the weather map. Then answer questions i-ii below.

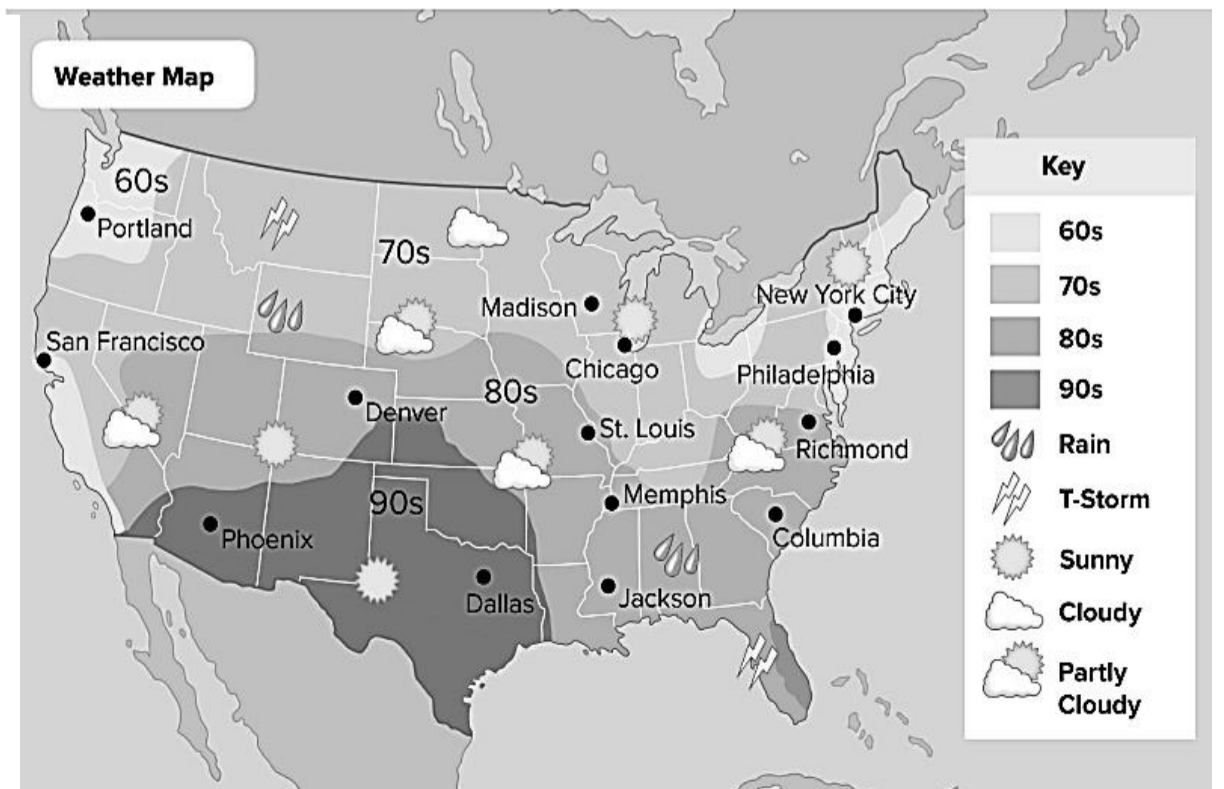
i. The weather map predicts that the **high temperature in Portland** will be in the

.....

- A. 60s
- B. 70s
- C. 80s
- D. 90s

ii. What will the **weather** be like in Jackson?

.....



Student Name: _____ Class: _____ Date: _____

Lesson: Weather Patterns

Fill in the blanks using the available answer choices:

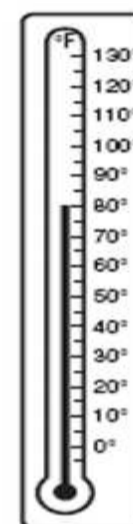
weather vane – weather – precipitation--speed

- 1) A tool that measures wind direction is a weather vane.
- 2) An anemometer measures wind speed.
- 3) Water that falls from the atmosphere is called precipitation.
- 4) Precipitation, wind, and air pressure are all ways to describe the weather.

Choose the appropriate letters A, B, C or D:

5) What temperature (in degrees Fahrenheit) does the thermometer show?

- A. 20°F
- B. 40°F
- C. 60°F
- D. 80°F



6) Which would be used to measure air pressure?

- A. weather vane
- B. thermometer
- C. anemometer
- D. barometer

7) Which is a type of precipitation?


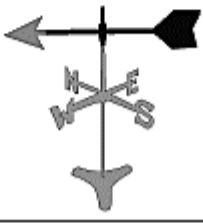



- A. wind
- B. hot temperatures
- C. rain
- D. tornadoes

8) What the air is like at a certain time and place is _____.

- A. wind
- B. atmosphere
- C. weather
- D. gases

9) Match each description to the correct weather tool. Write the name of the tool

(The first one has been done for you.)

It is an instrument for recording the speed and direction of the wind.	 Thermometer
It is an instrument used to measure the temperature.	 weather vane
It measures atmospheric pressure.	 Anemometer
This tool shows the direction of the wind.	 Rain guage
It is a device used to measure rainfall.	

10) Study the weather map. Then answer questions i-ii below.

i. The weather map predicts that the **high temperature in Portland** will be in the

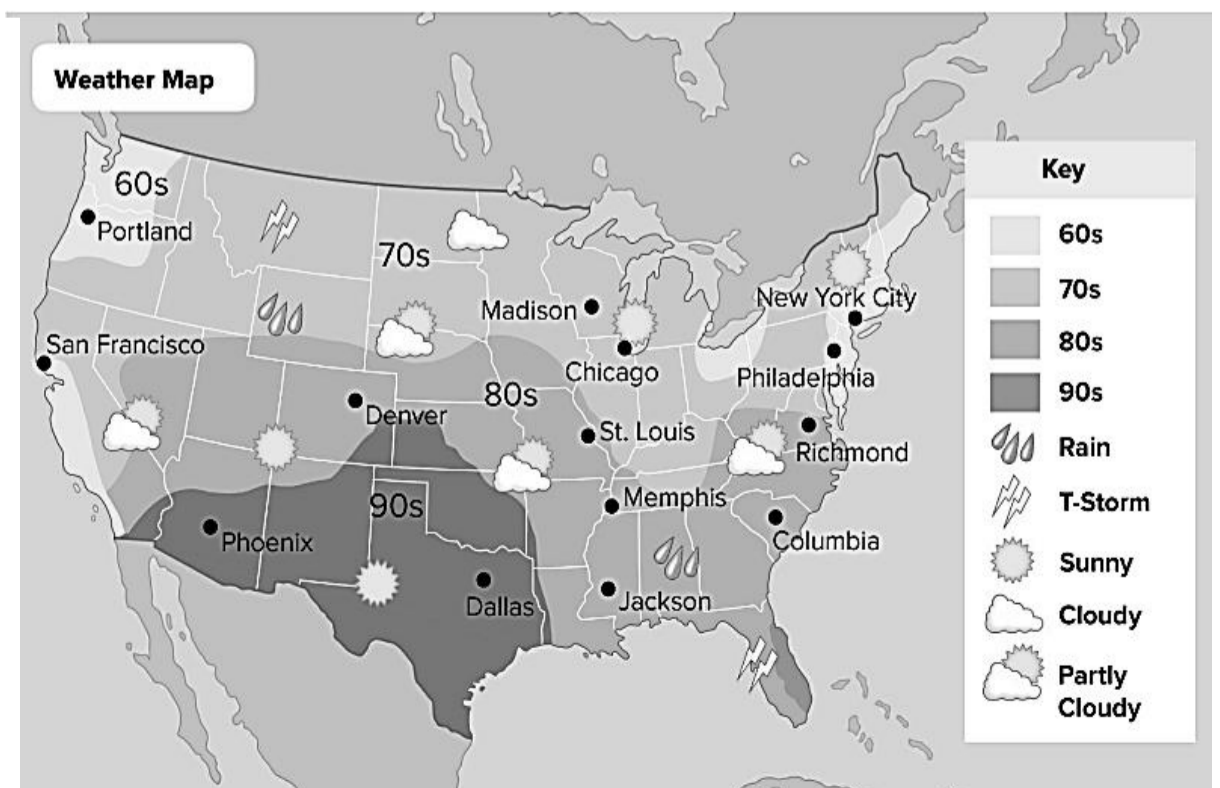
.....

- A. 60s
- B. 70s
- C. 80s
- D. 90s

ii. What will the **weather** be like in Jackson?

Rain

.....



Answer Key with Questions

Lesson Check: Weather Patterns

1) Water that falls from the atmosphere is called _____.

- precipitation
- temperature
- wind
- air pressure

Correct Answer

precipitation

2) Precipitation, wind, and air pressure are all ways to describe the _____.

Correct Answer

weather

Answer Key with Questions

Lesson Check: Weather Patterns

3) Which measures precipitation?



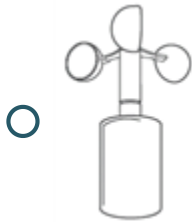
Correct Answer



Answer Key with Questions

Lesson Check: Weather Patterns

4) Which tool is used to measure temperature?




Correct Answer



Answer Key with Questions

Lesson Check: Weather Patterns

5) What kind of precipitation might fall on a very cold day?



Correct Answer

Answers may vary.

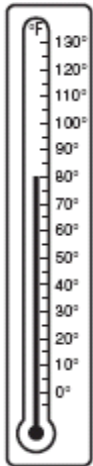
Explanation

Sample answers: snow, sleet, or hail

Answer Key with Questions

Lesson Check: Weather Patterns

6) What temperature (in degrees Fahrenheit) does the thermometer show?



- 20°F
- 40°F
- 60°F
- 80°F

Correct Answer

80°F

Answer Key with Questions

Lesson Check: Weather Patterns

7) Fill in the blanks using the available answer choices.

A tool that measures wind direction is a _____ .
(Blank 1)

Blank 1 options

- weather vane
- barometer

Correct Answer

weather vane

8) Which would be used to measure air pressure?

- weather vane
- thermometer
- anemometer
- barometer

Correct Answer

barometer

Answer Key with Questions

Lesson Check: Weather Patterns

9) Which is a type of precipitation?

- wind
- hot temperatures
- rain
- tornadoes

Correct Answer

rain

10) An anemometer measures wind _____.

Correct Answer

speed