

تم تحميل هذا الملف من موقع المناهج الإماراتية



almanahj.com

موقع
المناهج الإماراتية

*للحصول على أوراق عمل لجميع الصفوف وجميع المواد اضغط هنا

<https://almanahj.com/ae>

* للحصول على أوراق عمل لجميع مواد الصف الثالث اضغط هنا [3/ae/com.almanahj//:https](https://almanahj.com/ae/3)

* للحصول على جميع أوراق الصف الثالث في مادة علوم ولجميع الفصول, اضغط هنا [3science/ae/com.almanahj//:https](https://almanahj.com/ae/3science)

* للحصول على أوراق عمل لجميع مواد الصف الثالث في مادة علوم الخاصة بـ الفصل الأول اضغط هنا

<https://almanahj.com/ae/3science1>

* لتحميل كتب جميع المواد في جميع الفصول للـ الصف الثالث اضغط هنا [grade3/ae/com.almanahj//:https](https://almanahj.com/ae/grade3)

للتحدث إلى بوت المناهج على تلغرام: اضغط هنا [bot_almanahj/me.t//:https](https://t.me/bot_almanahj)

Question 1

45

Choose the correct answer for the following questions:

1-what is used to answer a question ?

- a. letter b. hypothesis c. report

2- What happen when a plant is in shade?

- a. it bends toward the light b.it retains water c. it grows fast

3-What do animals need to breath ?

- a. carbon dioxide b. oxygen c. helium

4-What do we use to look at a cell ?



a.



b.



c.

5-Which part for plant that absorbs water and nutrients?

- a. leaves b. stem c. roots

6- Which of these is not a reptile:



a.



b.



c.

7- What do plants need to reproduce?



a.



b.



c.

8- How do some animals change shape ?

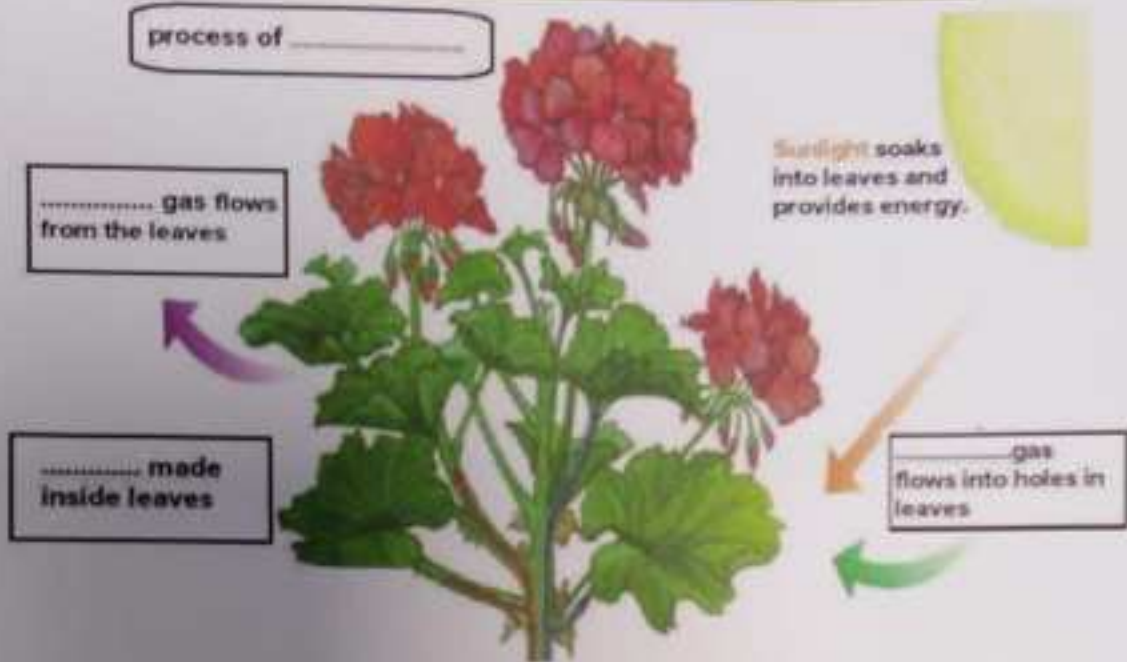
- a. metamorphosis b. heredity c. trait







- It is prohibited to photocopy or circulate the exam paper before / during and after the exam through e-mail, social media or any other means, and whoever violates this will be subject to the relevant legal proceedings.
- School Administrations, Exam Committees and Marking Centers shall take full responsibility, monitor solutions and take necessary measures.

E-Use the words to Complete the diagram:

oxygen - photosynthesis food - carbon dioxide



F-Mark each animal and its corresponding description with a line

| description | Animal |
|---|--|
| this bird cannot fly |  |
| this animal lives in water and breathes air. |  |
| has no bones, brains, or eyes. Their tentacles can sting their prey |  |
| animal spends part of its life in water and part on land? |  |

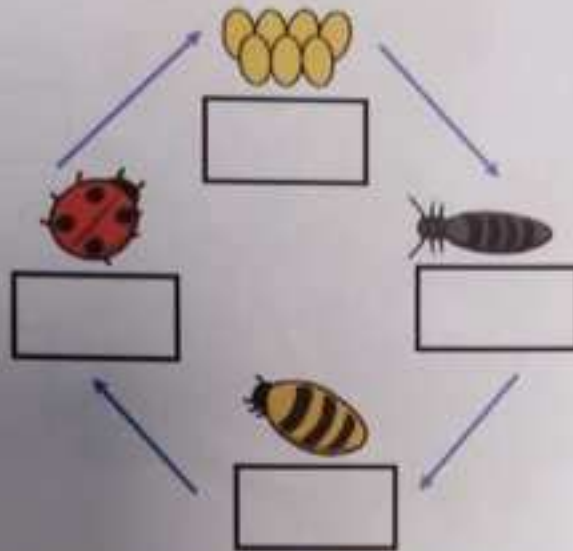


Question 2

A-Look at the life cycle of the ladybird
Write the correct words in the boxes

55

larva pupa eggs adult ladybug



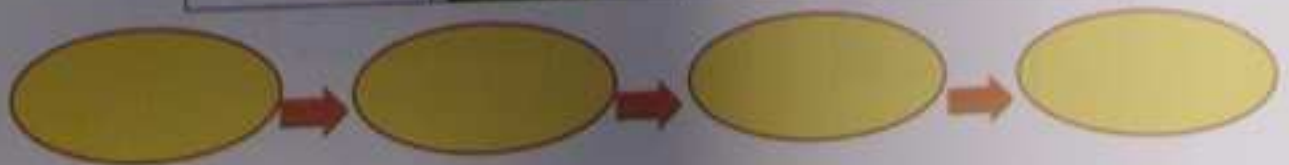
B-Group the following animals as vertebrates or invertebrates

Butterfly - cow- starfish- goldfish- owl- sponges

| vertebrates | invertebrates |
|-------------|---------------|
| cat | beetle |
| | |
| | |
| | |

C-Complete the food chain, write the name of organism in the correct order :

| | | | |
|-----------------|------------------|----------------|------------|
| pond snails | green plants | bald eagle | turtle |
|-----------------|------------------|----------------|------------|



- It is prohibited to photocopy or circulate the exam paper before / during and after the exam through e-mail, social media or any other means, and whoever violates this will be subject to the followed legal proceedings.
- School Administrators, Exam Committees and Marking Centers shall take due care to avoid, monitor violations and take necessary measures.

9-Which is not an inherited trait?

a. hair color

b. skin color

c. riding a bicycle


10-The process of moving pollen to the female part of a flower is:

a. Pollination

b. growth

c. reproduction

11- Which of these is living object in Ecosystems ?



12- What comes first in a food chain ?

a. decomposer

b. consumer

c. producer

13- What do hibernating Animals do ?

a. never sleep.

b. go into a deep sleep.

c. eat only plants.

14- What are ways people change nature to meet their needs ?

a. technology

b. system

c. model

5- who one designing something?

