

## تم تحميل هذا الملف من موقع المناهج الإماراتية



## أسئلة مراجعة امتحانية شاملة منهج انسابير

موقع المناهج ← المناهج الإماراتية ← الصف الثالث ← علوم ← الفصل الثاني ← الامتحان النهائي ← الملف

تاريخ إضافة الملف على موقع المناهج: 14:23:12 2025-02-27

ملفات اكتب للمعلم اكتب للطالب الاختبارات الكترونية | اختبارات | حلول | عروض بوربوينت | أوراق عمل  
منهج انجليزي | ملخصات وتقارير | مذكرات وبنوك | الامتحان النهائي للمدرس

المزيد من مادة  
علوم:

## التواصل الاجتماعي بحسب الصف الثالث



صفحة المناهج  
الإماراتية على  
فيسبوك

الرياضيات

اللغة الانجليزية

اللغة العربية

التربية الاسلامية

المواد على تلغرام

## المزيد من الملفات بحسب الصف الثالث والمادة علوم في الفصل الثاني

حل أسئلة مراجعة امتحانية الوحدة الرابعة منهج انسابير

1

حل أسئلة مراجعة امتحانية باللغتين العربية والانجليزية منهج انسابير

2

تدريبات عامة وفق الهيكل الوزاري

3

الهيكل الوزاري الامتحاني الجديد منهج بريدج

4

حل وإجابات الدرس الأول خصائص الأرض من الوحدة الخامسة تغيرات الأرض

5

Read the books and answer:

Page 56, 57 - Book 1

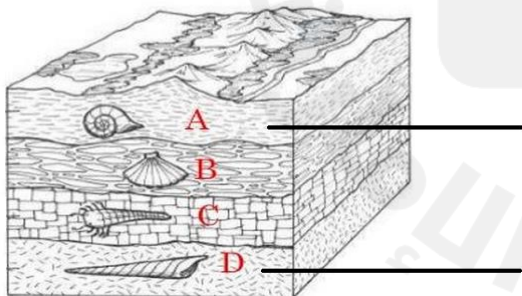
1. A trace of the remains of a living thing that died long ago is \_\_\_\_\_  
 A) Fossil      B) Molds      C) Preserved Remains      D) Trace Fossils
2. The shape of the animal's footprint leaves an imprint in mud or clay is \_\_\_\_\_  
 A) Trace fossils      B) Preserved Remains      C) Molds      D) Casts
3. \_\_\_\_\_ is formed when insects became trapped in tree sap, which hardened over time.  
 A) Trace fossils      B) Amber fossils      C) Molds      D) Casts
4. The actual remains of an organism trapped in Earth's material is \_\_\_\_\_  
 A) Trace fossils      B) Preserved Remains      C) Molds      D) Casts
5. The empty space can be filled with a new material to show what the original shell looked like is \_\_\_\_\_  
 A) Trace fossil      B) Preserved Remains      C) Molds      D) Casts

Page 58

6. When there is no more of an organism's kind left on Earth is \_\_\_\_\_  
 A) Extinction      B) Endangered      C) Fossils      D) Molds

Page 60

7. Identify and Write the youngest and Oldest layer in the blank of the picture.



8. The fossil of a fish was found at the top of a mountain. Which statement is MOST likely true?  
 A) The mountain was once a hill.      B) Fish used to live on the mountain  
 C) The mountain was once under water      D) Someone moved the fossil to the mountain.
9. Scientists may find many fossils buried at the same depth. What do they know about these fossils?  
 A) Organisms lived at about same time      B) Organisms lived at different time.

10. What do elephants and woolly mammoths have in common? (Trunk / Ears/ Tusk / Hair)

What is different about them? (Trunk / Ears / Tusk / Hair)



Page 67

11. A type of organism that has no living population is said to be \_\_\_\_\_

- A) fossil      B) remains      C) an organism      D) extinct

12. Use the table below to answer

Animal	Feature
Saber-toothed cat	Long, sharp teeth
Woolly mammoth	Flat teeth
Pterodactyl	Long wingspan
Triceratops	Leathery skin

13. Which animal was most likely a meat-eater?

- A) saber-toothed cat      B) woolly mammoth      C) pterodactyl      D) triceratops

Page 74,75

14. Living things get \_\_\_\_\_, \_\_\_\_\_ and \_\_\_\_\_ from their habitats.

- A) food      B) water      C) shelter      D) Notebook

15. Animals depend on plants for \_\_\_\_\_ and \_\_\_\_\_.

- A) food      B) shelter      C) Both A and B

16. Trees and other plants give off \_\_\_\_\_ that animals need to survive.

- A) oxygen      B) carbon dioxide      C) Both A and B

17. The grass on a meadow could not grow without \_\_\_\_\_, \_\_\_\_\_, \_\_\_\_\_, \_\_\_\_\_ and \_\_\_\_\_. (Select all the correct answers)


- A) air      B) water      C) sunlight      D) nutrients      E) soil      F) fossil

18. Bacteria, Worms, and Mushrooms break down \_\_\_\_\_ and \_\_\_\_\_ animals

- A) leaves      B) dead      C) both A and B

19.

**What do plants need?**  
Circle 4 things that plants need to grow



20. Match the following:



Seeds blow onto bare ground. The environment changes as plants take in water and nutrients.



Trees block sunlight from reaching smaller plants. These plants may die as trees grow larger.



As more plants grow, animals move into the environment. They use the plants for food and shelter.



Plants grow larger. They compete for water, space and sunlight. Animals compete for food and water.

Page 76

21. An organism that is introduced into a new ecosystem either by accident or on purpose by humans is \_\_\_\_\_

- A) native species
- B) Invasive species

22. Without predators, the population of the invasive species \_\_\_\_\_ rapidly.

- A) increases
- B) decreases

23. How might a beaver dam change the environment?

- A) Block the flow of water causing flooding
- B) Plays well with water



BOOK - 2 (UNIT : WEATHER IMPACTS)

Page 10,11

24. The air is like outside at a certain time and place is \_\_\_\_\_

- A) weather
- B) atmosphere
- C) temperature
- D) winter



25. A blanket of gases and tiny bits of dust that surround Earth is \_\_\_\_\_.

- A) weather
- B) atmosphere
- C) temperature
- D) winter

26. \_\_\_\_\_ is a measure of how hot or cold something is.

- A) weather
- B) atmosphere
- C) temperature
- D) winter

27. Match the weather.



Stormy

Partly cloudy

Rain

Sunny

Cloudy

Windy

28. What is the temperature in degrees Celsius? (refer the thermometer picture)

- A) 74°C
- B) 24°C
- C) 20°C
- D) 28°C

29. A \_\_\_\_\_ is a tool that measures temperature.

- A) barometer
- B) thermometer
- C) anemometer
- D) rain gauge

30. Water usually freezes at 0°C. What is the temperature at which water freezes in Fahrenheit? (refer the thermometer picture)

- A) 20°F
- B) 32°F
- C) 0°F
- D) 40°F



Page 12

31. \_\_\_\_\_ is water that falls to the ground from clouds.

- A) Air pressure
- B) Precipitation
- C) Wind
- D) Temperature

32. A \_\_\_\_\_ is used to measure precipitation.

- A) barometer
- B) thermometer
- C) anemometer
- D) rain gauge



33. When rain falls through a layer of freezing-cold air is \_\_\_\_\_.

- A) snow                      B) hail                      C) sleet                      D) rain

34. \_\_\_\_\_ is made of ice crystals.

- A) Snow                      B) Hail                      C) Sleet                      D) Rain

35. \_\_\_\_\_ forms when rain freezes and is tossed about in a tall cloud.

- A) Snow                      B) Hail                      C) Sleet                      D) Rain

36. The force of air pressing down on Earth's surface is \_\_\_\_\_.

- A) Temperature              B) Precipitation              C) Air pressure              D) Wind

37. A \_\_\_\_\_ is used to measure air pressure.

- A) barometer              B) thermometer              C) anemometer              D) rain gauge

38. \_\_\_\_\_ is moving air.

- A) Temperature              B) Air pressure              C) Wind                      D) Precipitation

39. A \_\_\_\_\_ is used to measure wind direction.

- A) barometer              B) wind vane              C) anemometer              D) rain gauge

40. A \_\_\_\_\_ is used to measure wind speed.

- A) barometer              B) wind vane              C) anemometer              D) rain gauge

41. Match the following.

## Weather instruments

Draw a line from the weather to the instrument:



To measure precipitation



To see wind direction

To measure wind speed



To check the temperature



Thermometer



Rain gauge

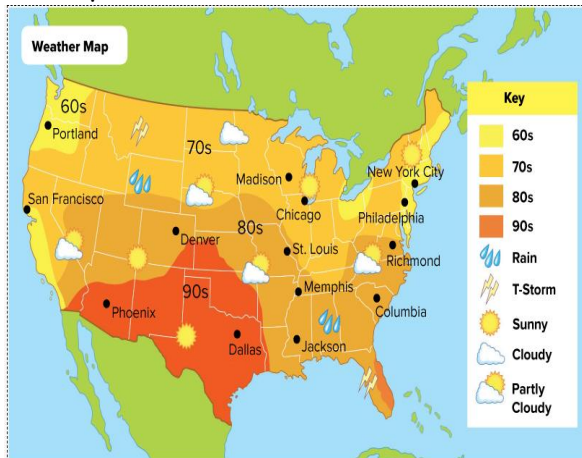


Weather /wind vane



Anemometer

42. Study the weather map and look at the weekly forecast for the city of Dallas, Texas. Then answer questions below.



Weekly Forecast for Dallas, Texas:				
Monday	Tuesday	Wednesday	Thursday	Friday

- (i) The weather map predicts that the high temperature in Dallas will be in the \_\_\_\_\_  
 A) 60s                      B) 70s                      C) 80s                      D) 90s
- (ii) What kind of weather conditions would you expect Dallas to have on Thursday?  
 A) Sunny                      B) Rainy                      C) Partly cloudy                      D) Cloudy

43. The pattern of weather in a certain place over a long period of time is \_\_\_\_\_

- A) Climate                      B) Seasons                      C) Weather                      D) All the above

44. \_\_\_\_\_ are times of the year with different weather patterns.

- A) Climate                      B) Seasons                      C) Weather                      D) all the above

45. The seasons are caused by the way Earth is \_\_\_\_\_ and moves around the \_\_\_\_\_.

- A) tilted, Moon                      B) tilted, Sun

46. There are \_\_\_\_\_ seasons.

- A) 6                      B) 4                      C) 8                      D) 2

47. Read the page 27 and answer.

a) Winter is the \_\_\_\_\_ season. There are \_\_\_\_\_ hours of daylight. Temperatures can be \_\_\_\_\_ in winter. Precipitation may fall as \_\_\_\_\_ in some areas.

b) In spring, temperatures are \_\_\_\_\_. There are \_\_\_\_\_ hours of daylight. Animals that were away during \_\_\_\_\_ begin to return.

c) Temperatures are the warmest in \_\_\_\_\_ season.

d) In \_\_\_\_\_ season, there are fewer hours of daylight and temperatures are \_\_\_\_\_

48. Match the seasons.



Spring



Winter



Fall



Summer

Page 29

49. Earth has an imaginary line called an \_\_\_\_\_ through its center.

- A) tilted      B) angle      C) season      D) axis

Page 44 - 46

50. A \_\_\_\_\_ is a natural event, such as a flood, earthquake, or hurricane, that causes great damage.

- A) Natural hazard      B) Environment      C) Weather      D) Seasons

51. Match the following.



Flood

Earthquake

Landslide



52. A \_\_\_\_\_ is water that flows over land that is normally dry.

- A) Earthquake                      B) Floods                      C) Landslides

53. A \_\_\_\_\_ is the rapid movement of rocks and soil down a hill or mountain by gravity.

- A) Earthquake                      B) Floods                      C) Landslides

54. An \_\_\_\_\_ is the shaking of Earth's surface and caused by movement in Earth's crust.

- A) Earthquake                      B) Floods                      C) Landslides

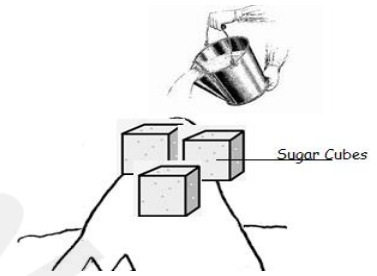
Page 53

55. Which natural disaster could also be caused by an earthquake?

- A) tornado                      B) forest fire                      C) landslide                      D) flashflood

56. Joel builds a hill of sand in his backyard. He places some sugar cubes on the hill. He pours a bucket of water down the hill and observes what happens to his model. He most likely does this to see \_\_\_\_\_.

- A) how a flashflood affects the land  
B) how a forest fire affects the land  
C) how a tornado affects the land  
D) how a rain shower affects the land



57. Identify the natural hazards.

- i)                                      ii)                                      iii)                                      iv)



A) i, ii, iii

B) i, iii, iv

C) i, ii, iv

D) i, ii, iv

Page 62,63

58. \_\_\_\_\_ are walls built to reduce or prevent flooding in an area.

- A) Floodwalls                      B) Levee                      C) Lightning rod

59. A \_\_\_\_\_ is a wall built along the side of rivers and other bodies of water to prevent them from overflowing.

- A) Floodwalls                      B) Levee                      C) Lightning rod

60. A \_\_\_\_\_ is a metal bar that safely directs lightning into the ground.

- A) Floodwalls                      B) Levee                      C) Lightning rod

Page 73

61. What structure will help a building withstand an earthquake best?

- A) A tall wooden building                      B) A one-story brick building  
C) A tall brick building                      D) A short wooden building

\*\*\*\*\* ALL THE BEST\*\*\*\*\*