

تم تحميل هذا الملف من موقع المناهج الإماراتية



*للحصول على أوراق عمل لجميع الصفوف وجميع المواد اضغط هنا

<https://almanahj.com/ae>

* للحصول على أوراق عمل لجميع مواد الصف الرابع اضغط هنا

<https://almanahj.com/ae/4>

* للحصول على جميع أوراق الصف الرابع في مادة رياضيات ولجميع الفصول, اضغط هنا

<https://almanahj.com/ae/4math>

* للحصول على أوراق عمل لجميع مواد الصف الرابع في مادة رياضيات الخاصة بـ الفصل الثالث اضغط هنا

<https://almanahj.com/ae/4math3>

* لتحميل كتب جميع المواد في جميع الفصول للـ الصف الرابع اضغط هنا

<https://almanahj.com/ae/grade4>

للتحدث إلى بوت المناهج على تلغرام: اضغط هنا

https://t.me/almanahj_bot

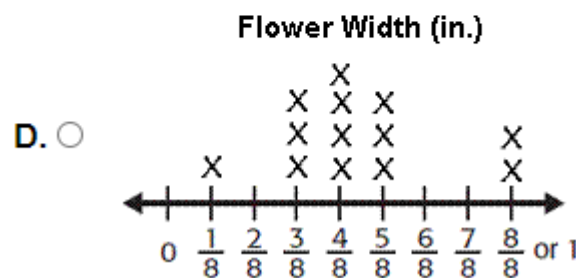
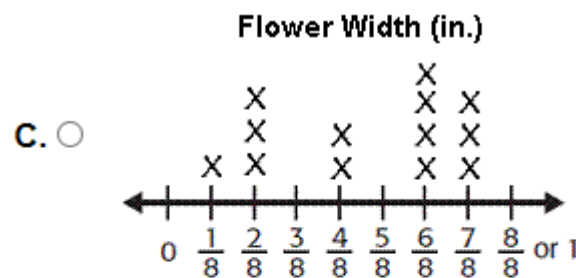
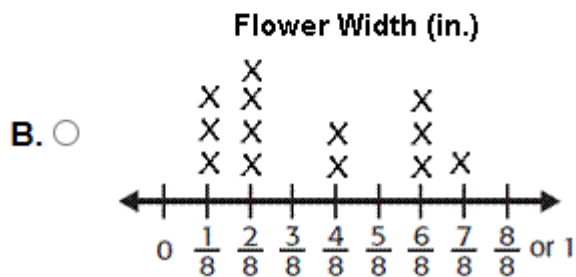
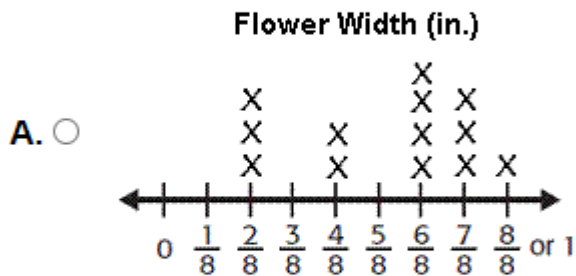
Name: _____ Date: _____

Math Revision - Central Exam 2 – Grade 4 – Term 3

1.

The tally chart shows the width of flowers to the nearest eighth of an inch. Which line plot represents the data?

| Flower Width | |
|--------------|--|
| 1/8 in. | |
| 2/8 in. | |
| 4/8 in. | |
| 6/8 in. | |
| 7/8 in. | |



2. length of an airport runway

- (A) 5 mm
- (B) 50 cm
- (C) 5 m
- (D) 5 km



3. height of a cornstalk

- (A) 2 mm
- (B) 2 cm
- (C) 2 m
- (D) 2 km



4. Choose the best estimate for the distance between home and school.

- A. 3 kilometers
- B. 3 millimeters
- C. 3 centimeters
- D. 30 millimeters

5. (A) 17 mL
(B) 170 mL
(C) 170 L
(D) 17 L



6. (A) 10 mL
(B) 100 mL
(C) 10 L
(D) 100 L



7. A) 450 g
B) 450 kg



8. A) 25 g
B) 25 kg



9. Complete

$$2 \text{ m} = ? \text{ cm}$$

- A. 20 cm
B. 200 cm
C. 2 cm
D. 2,000 cm

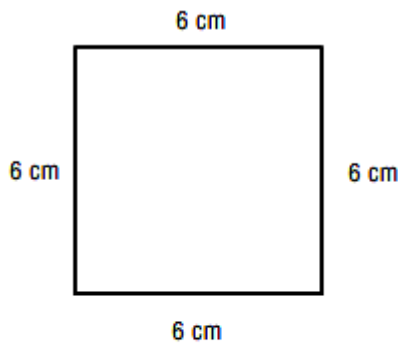
10. $6 \text{ kg} = ? \text{ g}$

- A. 6,000 g
B. 600 g
C. 60 g
D. 6 g

11. Which is equivalent to 300 m?

- (A) 30 km (C) 30,000 cm
(B) 3 km (D) 3,000 cm

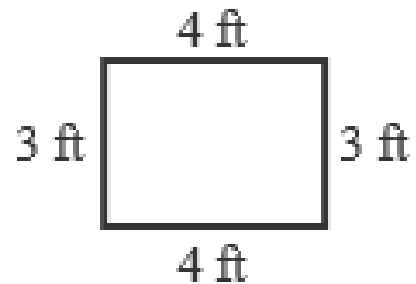
12. Find the perimeter of the square




- A. 32 cm
- B. 18 cm
- C. 48 cm
- D. 24 cm

13. Find the perimeter

- A. 12 ft
- B. 14 ft
- C. 11 ft
- D. 7 ft



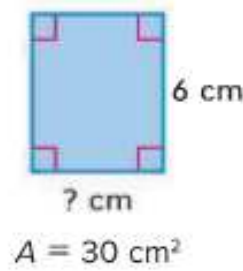
14. Find the area of the rectangle.



- A. 36 square units
- B. 24 square units
- C. 28 square units
- D. 48 square units

15. What is the perimeter of the rectangle?

- (A) 22 cm
- (B) 24 cm
- (C) 26 cm
- (D) 28 cm



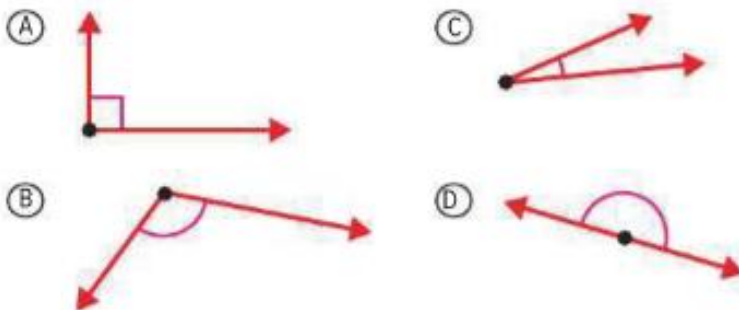
16. What is the perimeter of a rectangular room with side lengths of 24 feet and 15 feet?

- A. 78 ft
- B. 39 ft
- C. 360 ft
- D. 48 ft


17. A square has a perimeter of 28 m.
What is its area?

- (A) 45 m^2
- (B) 48 m^2
- (C) 49 m^2
- (D) 50 m^2

18. Which is the acute angle?



19. What is the measure of the given angle?



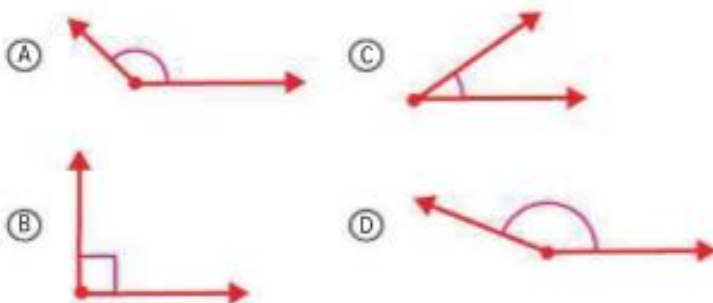
- A. 175°
- B. 120°
- C. 90°
- D. 60°

20. What is the measure of the angle?



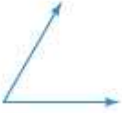



- A. 90°
- B. 135°
- C. 50°
- D. 75°

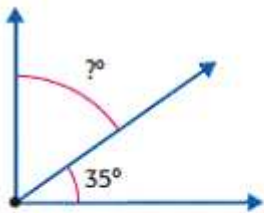
21. Which is the correct drawing of a 160° angle?



22. Identify the angle that measures 60° .

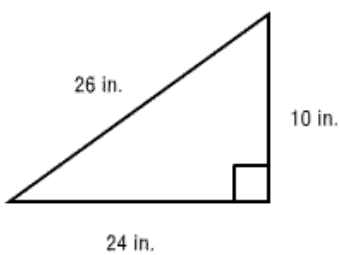
- A. 
- B. 
- C. 
- D. 

23. The combined angle measure is 100° . What is the missing angle measure?



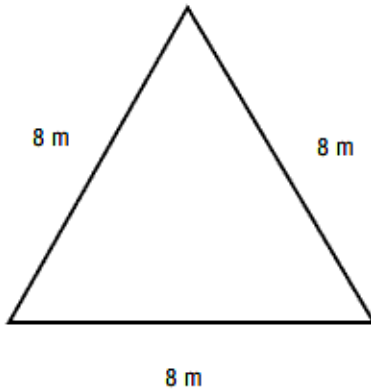
- A. 45°
- B. 35°
- C. 65°
- D. 50°

24. Classify the triangle based on its angles.



- A. obtuse
- B. acute
- C. right
- D. cannot be determined

25. Classify the triangle based on its angles.



- A. right
- B. obtuse
- C. acute
- D. cannot be determined

26. Classify the quadrilateral in as many ways as possible.



- A. square
- B. rhombus
- C. trapezoid
- D. rectangle

27. Classify the quadrilateral in as many ways as possible.



- A. trapezoid
- B. square
- C. rhombus
- D. parallelogram

Answer Key:

| | | | | | | | |
|---|---|----|---|----|---|----|---|
| 1 | C | 8 | A | 15 | A | 22 | C |
| 2 | D | 9 | B | 16 | A | 23 | C |
| 3 | C | 10 | A | 17 | C | 24 | C |
| 4 | A | 11 | C | 18 | C | 25 | C |
| 5 | B | 12 | D | 19 | D | 26 | C |
| 6 | C | 13 | B | 20 | B | 27 | D |
| 7 | B | 14 | C | 21 | D | | |

Good Luck

Math Teacher: Noaman Saad